

Discount




A toy manufacturer produced 1200 toy cars at a total cost of ₹91,000. He donated 200 cars to a charity event. For the rest, he announced a 10% discount on the market price of ₹120 per car. He also offered 2 toy cars free for every 8 toy cars purchased. If all 1200 toy cars were distributed, what is his overall gain or loss percentage ? SSC CGL 12/09/2025 (Shift 1)

- (a) 5.05% loss (b) 5.05% profit (c) 6.05% loss (d) 6.05% profit

A retailer marks a car 80% above its cost price. He offers a first discount of 25% on the marked price. During a festive offer, an additional discount of 10% is applied on the already discounted price. If the final selling price is ₹19,440, what is the approximate cost price of the car ?" SSC CGL 12/09/2025 (Shift 1)

- (a) ₹16,000 (b) ₹16,200 (c) ₹16,800 (d) ₹18,000




A mobile phone retailer sells a phone for ₹P and makes a profit of 30%. For a special festive offer, he sells the same phone for ₹1.5P. He offers a 10% discount on the offer. What percentage profit will he make during the festive offer? SSC CGL 12/09/2025 (Shift 3)

(a) 70.5%

(b) 72.5%

(c) 75.5%

(d) 78.5%



A shopkeeper marked an item 20% above its cost price. During a sale, he offered a discount of 10%. What was his profit percentage? SSC CGL 12/09/2025 (Shift 3)

(a) 10%

(b) 8 %

(c) 15%

(d) 17.5%



A shopkeeper marks his goods at 50% above the cost price. He allows a discount of 20% on the marked price. If he also gives an additional cash discount of ₹ 300 , and still makes a profit of 14% on the cost price, what is the cost price of the goods?

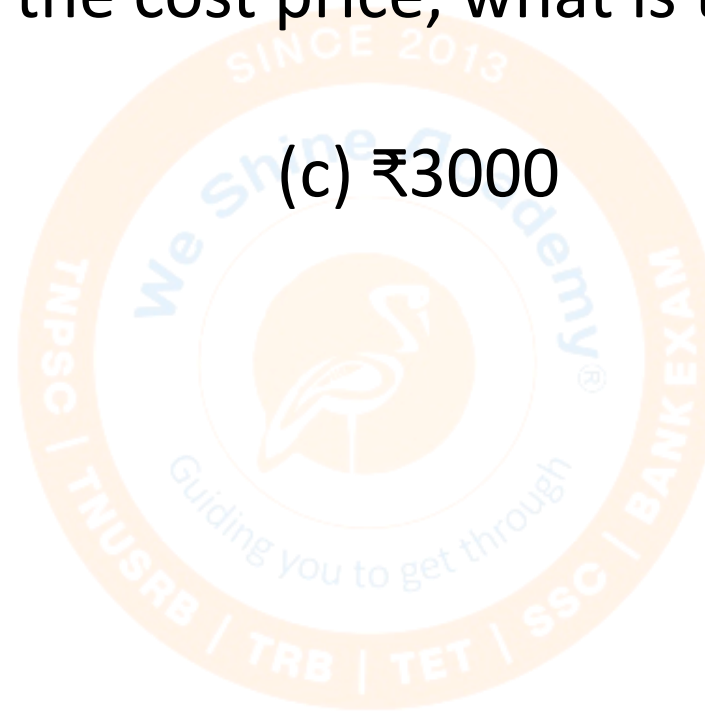
SSC CGL 12/09/2025 (Shift 3)

(a) ₹5500

(b) ₹5000

(c) ₹3000

(d) ₹3500



A wholesaler buys a batch of ceiling fans at a 40% markup over the factory's base cost ₹P. He then allows a 10% trade discount to the retailer. The retailer applies a 50% markup on his cost and offers a flat 10% discount to customers on the printed price. If a customer finally pays ₹20412, what is the original base cost (₹P) of one ceiling fan from the factory ? SSC CGL 13/09/2025 (Shift 2)

(a) ₹12,000

(b) ₹11,500

(c) ₹10,800

(d) ₹10,000

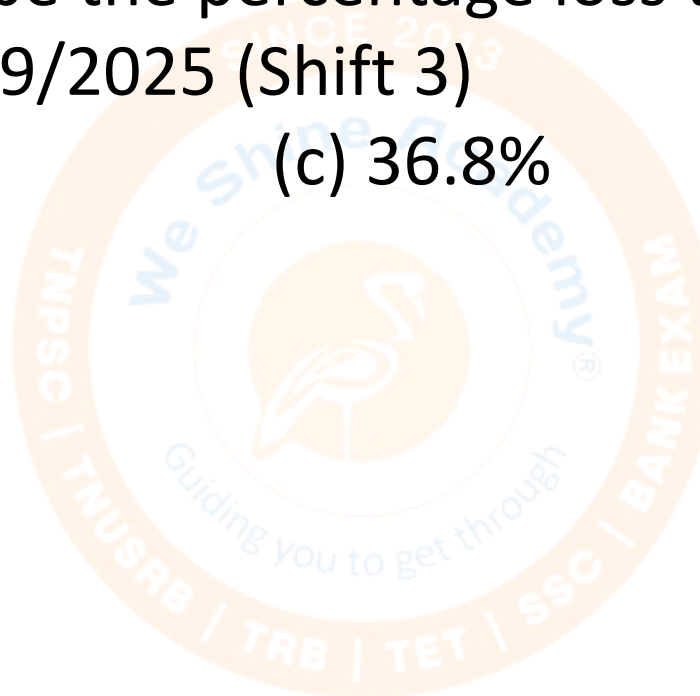
A bookseller sells a novel for ₹ A and makes a loss of 15%. To clear old stock, he decides to mark the novel at ₹0.8A. He then allows a further discount of 10% on this marked price. What will be the percentage loss that he will incur on this clearance sale? SSC CGL 13/09/2025 (Shift 3)

(a) 30.5%

(b) 45.5%

(c) 36.8%

(d) 38.8%



An article is marked at ₹600. A shop owner allows a discount of 6% and still gains 4%. What is the approximate cost price of the article ? SSC CGL 13/09/2025 (Shift 3) (a) ₹540.31 (b) ₹555.30 (c) ₹542.31 (d) ₹600.51



A wholesaler marks up the price of a microwave oven by 50 % above its cost price. He gives a 15% trade discount to a retailer. The retailer, in turn, marks up the price by 20 % above his purchase price and offers a 10% festival discount to the customer. If the customer finally pays ₹12,200 for the microwave, what is the original approximate cost price of the oven to the wholesaler ? SSC CGL

14/09/2025 (Shift 1)

(a) ₹8860

(b) ₹8,500

(c) ₹8,000

(d) ₹8650


A dress is marked at ₹4,500. A discount offer changes from 12% to 17%. How much extra discount does a customer get? SSC CGL 14/09/2025 (Shift 2)

(a) ₹225

(b) ₹185

(c) ₹195

(d) ₹200



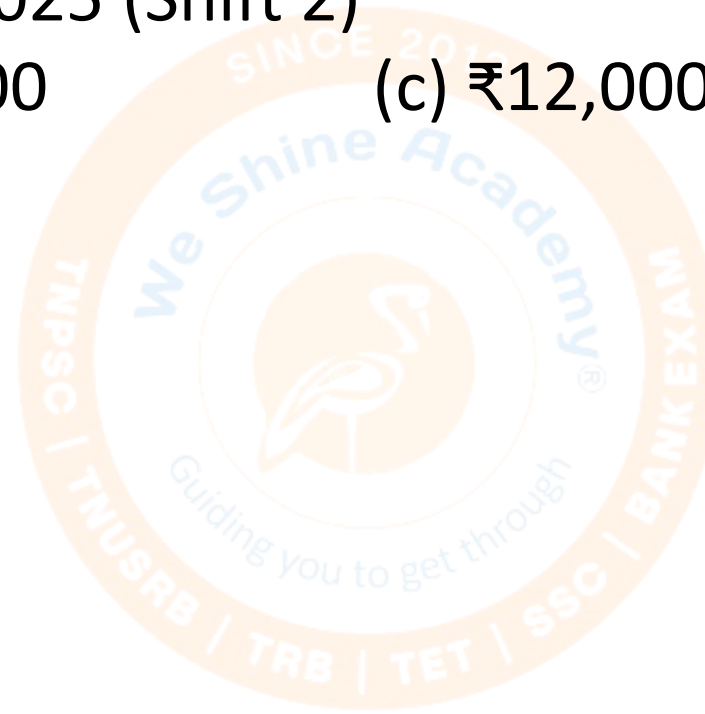
A dealer sets the marked price of a television 40% higher than its cost price. If he gives a discount of 25% and makes a profit of ₹600, what is the cost price of the television ? SSC CGL 14/09/2025 (Shift 2)

(a) ₹10,000

(b) ₹12,500

(c) ₹12,000

(d) ₹18,000



A merchant marked an article such that its price was 30% above its cost price. He offered two consecutive discounts of 20% and 12.5% to a buyer. If he incurred a loss of ₹540, what was the marked price of the article? SSC CGL 14/09/2025

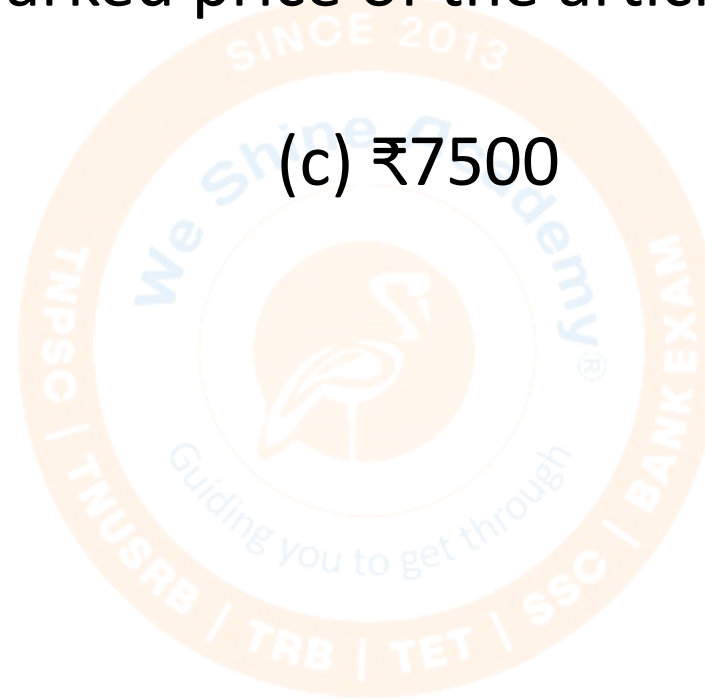
(Shift 2)

(a) ₹7800

(b) ₹5000

(c) ₹7500

(d) ₹6800



A furniture store sells a chair for ₹Z, making a 20% loss. During a festive season, they increase the marked price of the same chair to ₹2.6Z. They then offer a special discount of 40% on this increased marked price. What will be the percentage profit made by the store during the festive season? SSC CGL 14/09/2025 (Shift 3)

(a) 26%


(b) 24.8%

(c) 26%

(d) 30%

A mobile shop owner buys 10 boxes of mobiles for the price of 8 boxes from a wholesaler. If he sells each box at a 2% discount on its marked price, what is his profit percentage? SSC CGL 15/09/2025 (Shift 1)

- (a) 10% (b) 24.36% (c) 22.5% (d) 23.86%



A fruit seller offers mangoes to a retailer at a 30% discount on the marked price. However, they charge an additional 5% on the discounted price for shipping. The retailer sells the mangoes for ₹1620 more, earning a profit of 40%. What was the marked price of the mangoes? SSC CGL 15/09/2025 (Shift 1)

(a) ₹5,510.20

(b) ₹9,254.62

(c) ₹8,181.82

(d) ₹20,654.67


A shopkeeper marked an item 80% above its cost price. He then offered two successive discounts of 20% and 25%. If he made a profit of ₹160, at what price did he sell the item ? SSC CGL 15/09/2025 (Shift 2)

(a) ₹2000

(b) ₹2500


(c) ₹2160

(d) ₹1000



The marked price of a TV is ₹30,000. Amit receives two successive discounts while buying it. If the first discount is 20% and the final price he pays is ₹16,800, what is the second discount rate? SSC CGL 16/09/2025 (Shift 1)

- (a) 30% (b) 16% (c) 14% (d) 15%



A large, faint watermark of the Weshine Academy logo is centered in the background. The logo is circular with an orange border. Inside the border, the text "SINCE 2013" is at the top, "Weshine Academy" is in the middle, and "Guiding you to get through" is at the bottom. The outer ring of the logo contains the text "TNUSRB | TRB | TET | SSC | BANK EXAM".

Thank You